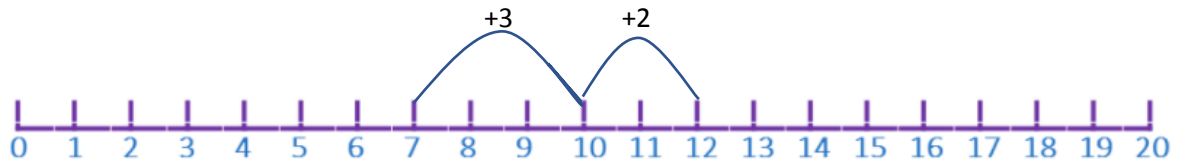


Wednesday

Solve the following questions by adding to make 10 first and counting on (see video for more support)

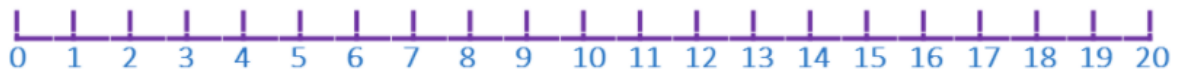
For example, this is how you could solve  $7 + 5$



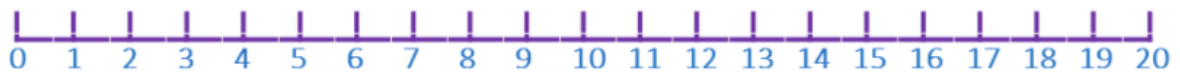
So, the answer is 12.

You can use either the number lines here, or the one in your learning pack.

$$8+4=$$

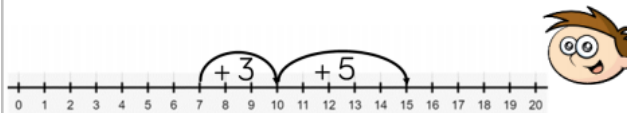


$$6+5=$$

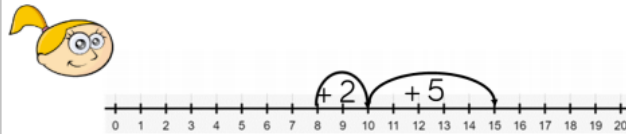


Teddy and Eva are adding together 7 and 8 using a number line.

Teddy shows it this way:



Eva shows it this way:



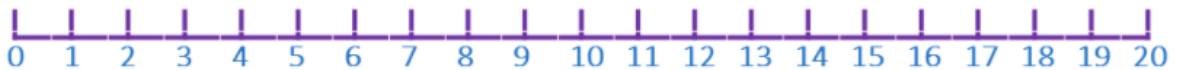
Who is correct?  
Explain your answer.

*Solve the following questions by making 10 first and counting on (use previous example to help)*

$$5+8=$$



$$9+6=$$



Extension:

Maths Magician solves  $9+7$

+1

+7



He gets the answer 17. Is he correct?

Show on the number line any changes you may need to make.