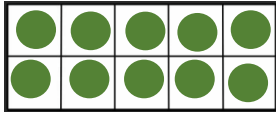



Monday

Use the ten frames and number sentence to write the inverse operation.




$10+4= 14$

$14- =$




$9+ =$


$13-4= 9$



$12+4=16$

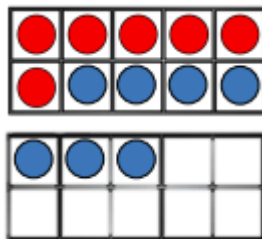


Rosie asks:

'If we know that $15-5$ is 10 , why can't we say $5-15$ is 10 ?' 

Write a sentence to explain your answer below.

Can you write an addition and subtraction sentence to match the ten frames? Remember these need to show the inverse operation so you will use the same three numbers.



Extension:

Can you write two number sentences showing the inverse operation?

