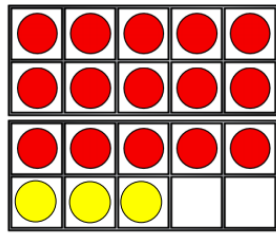


Tuesday

Complete the statements to match the ten frames.



$$15 + \underline{\quad} =$$

$$18 - \underline{\quad} =$$

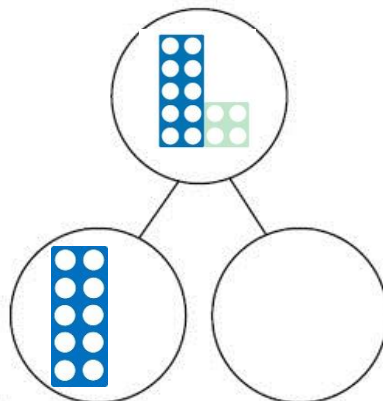
Find the missing number and then complete the statements.

$$10 + \underline{\quad} = 14$$

$$\underline{\quad} + 10 = 14$$

$$14 = 10 + \underline{\quad}$$

$$14 = \underline{\quad} + 10$$



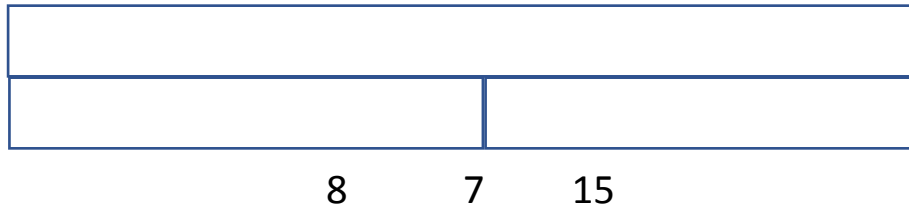
$$14 - 10 = \underline{\quad}$$

$$14 - \underline{\quad} = 10$$

$$10 = 14 - \underline{\quad}$$

$$\underline{\quad} = 14 - 10$$

Place the following numbers in the bar model and make as many addition and subtraction sentences that you can.



Maths Magician challenges you to write all 8 number sentences for the following numbers:

10

5

15

