

Monday

Represent the number 15 using your maths resources. This can include a number line or number grid.

Use your resources to help you complete the statements:

One more than 15 is

One less than 15 is

Use the number track to complete the statements.

34	35	36	37	38	39	40	41	42	43
----	----	----	----	----	----	----	----	----	----

One more than 39 is

One less than 39 is

Eva says, 'One more than 39 is 50'.



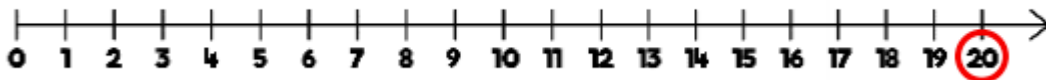
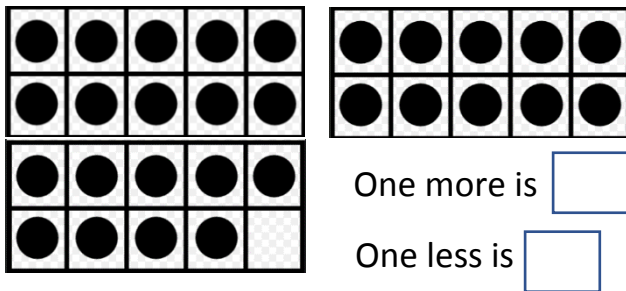
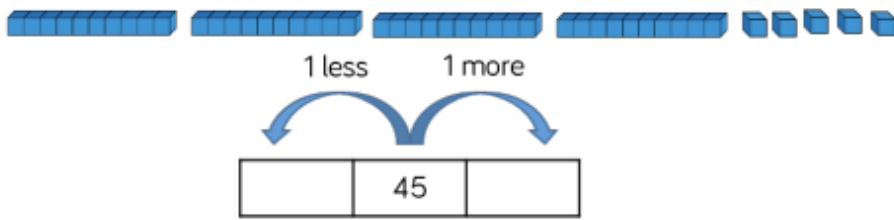
Is she correct? Explain your answer.

---

---

---

Use the pictures to find one more and one less.



One more is

One less is

Extension:

Choose the correct numbers to make the sentences correct



28 26 33 45

36 43 35 49

is one less than 27

34 is one less than

is one more than 44

50 is one more than