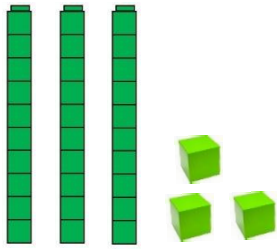



Thursday

Match the pictures to the correct number.



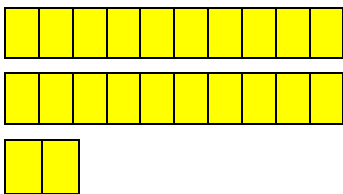
12



40



33



22

How many different ways can you represent the following numbers, showing their tens and ones?

34

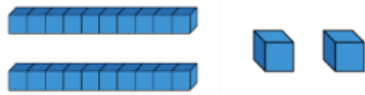
28

40

Use any resources to represent tens and ones in showing these numbers.

Jack represents the number 24.

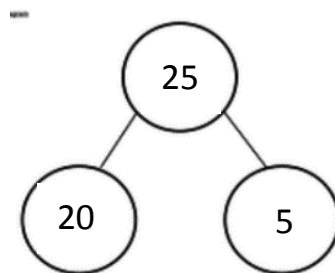
Has he represented this number? Write the number you think he has represented in the box.



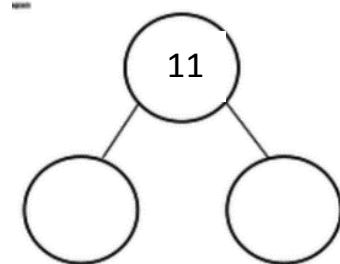
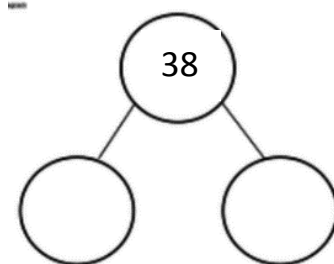
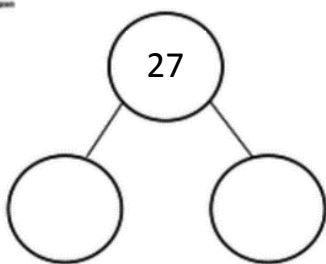
No, he needs to add two more cubes/ ones.

Complete the part-whole models to show the tens and ones.

Here's an example to help you:



'Twenty'      'Five'



Extension:

Maths Magician says, 'My number has 1 ten and 8 ones. What is my number?'



Work out what the number is and write it below.