

Tuesday

Fill in the spaces to write the number of ones and tens represented

There is \_\_\_ ten



There are \_\_\_ ones



There is \_\_\_ ten



There are \_\_\_ ones



There are \_\_\_ tens



There are \_\_\_ ones



Note: On last question there are 0 ones, do not include the ones in the tens.

One bundle of straws represents 10



= 10

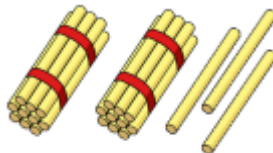
Fill in the spaces to write the number of tens and ones represented.

There is \_\_\_ ten



There are \_\_\_ ones

There are \_\_\_ tens

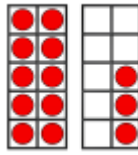


There are \_\_\_ ones

Dora says:



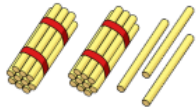
'I have 1 ten



and 3 ones'

Is she correct? Put a tick or a cross in the box to show your answer.

Complete the statements to make them correct



There are \_\_\_ tens and \_\_\_ ones.

\_\_\_ tens + \_\_\_ ones = 23

Extension:

Maths Magician challenges you to represent the number 15, identifying the number of tens and ones. You can use any resources of your choosing.

