

Wednesday

Fill the spaces to make the statements correct.

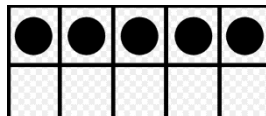



There is ___ ten



There are ___ ones

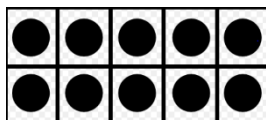
___ tens + ___ ones = ___



There are ___ tens

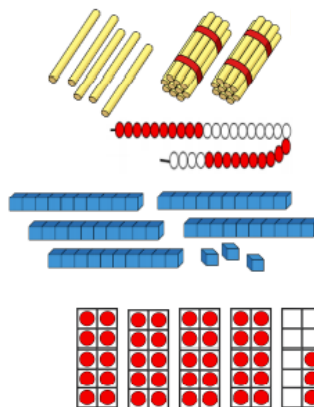
There are ___ ones

___ tens + ___ ones = ___



Match the pictures and words.


- Four tens and three ones
- Two tens and five ones
- Three tens and four ones
- Three ones and five tens



9

Amir looks at the picture below and says:


'The number represented is 5 because $2+3=5$ '



Is he correct? Explain your answer below.


Incorrect- there are 2 tens and 3 ones, so 23 is represented.

Match the pictures to the correct statements and number they represent.



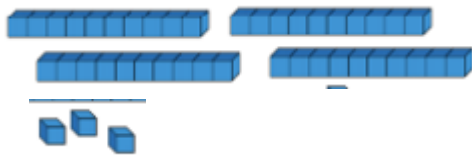
1 ten and 5 ones

15



2 tens and 0 ones

20



4 tens and 3 ones

43

Extension:

Maths Magician asks, 'What is greater: 1 ten or 9 ones?'

Explain your answer underneath.



Children explain that 9 ones is smaller than 1 ten. Encourage them to prove their answer using resources.