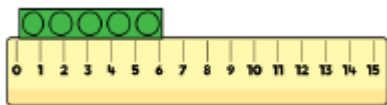


Friday 5<sup>th</sup> March 2021

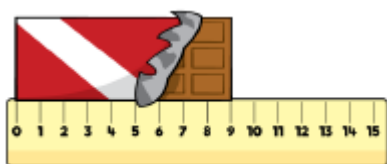
LO: to measure lengths and heights.

How long is the building block?



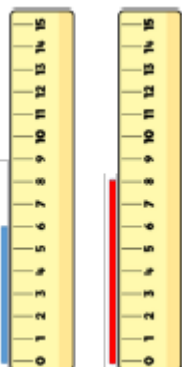
The building block is \_\_\_\_\_ cm long.

How long is the chocolate bar?



The chocolate bar is \_\_\_\_\_ cm long.

Which straw is the tallest?



The blue straw is \_\_\_\_\_ cm tall.

The red straw is \_\_\_\_\_ cm tall.

The \_\_\_\_\_ straw is the tallest.

The \_\_\_\_\_ straw is the shortest.

Friday 5<sup>th</sup> March 2021

LO: to measure lengths and heights.

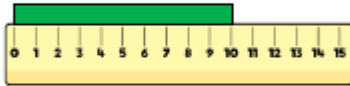
The children are measuring their ribbons.

Unfortunately Dexter has lost his ribbon.

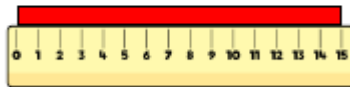
He says,



My ribbon is shorter than Rosie's, but longer than Eva's.



Eva



Rosie



How long could Dexter's ribbon be?